

UK JUNIOR MATHEMATICAL CHALLENGE

THURSDAY 27th APRIL 2017

Organised by the **United Kingdom Mathematics Trust**
from the **School of Mathematics, University of Leeds**

<http://www.ukmt.org.uk>



Institute
and Faculty
of Actuaries

SOLUTIONS LEAFLET

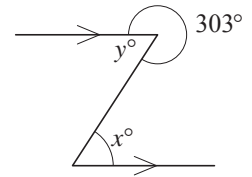
This solutions leaflet for the JMC is sent in the hope that it might provide all concerned with some alternative solutions to the ones they have obtained. It is not intended to be definitive. The organisers would be very pleased to receive alternatives created by candidates.

For reasons of space, these solutions are necessarily brief. There are more in-depth, extended solutions available on the UKMT website, which include some exercises for further investigation:

<http://www.ukmt.org.uk/>

The UKMT is a registered charity

1. **E** The values of the options are A 1; B 2; C 2; D 2; E 3.
2. **D** Nadiya puts her cake into the oven at 11:40 am. So 20 minutes later, it will be 12:00. Then, there will still be 1 hour and 15 minutes before the cake is due to be taken out of the oven. So she should take her cake out at 1:15 pm.
3. **D** The angles which meet at a point sum to 360° , so $y = 360 - 303 = 57$. As the marked lines are parallel, the angles marked x° and y° are equal (alternate angles). So $x = y = 57$.



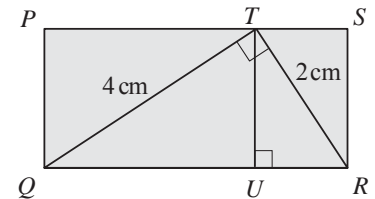
4. **E** As 95% of the download is complete, 5% of it remains to be downloaded. As a fraction, $5\% = \frac{5}{100} = \frac{1}{20}$.
5. **C** $201 \times 7 - 7 \times 102 = 7(201 - 102) = 7 \times 99 = 7(100 - 1) = 700 - 7 = 693$.

6. **D** Let the total of each row, column and both diagonals be T . Note that $2 + 3 + 4 + 5 + 6 + 7 + 8 + 9 + 10 = 54$. Therefore $3T = 54$, that is $T = 18$. It is clear that option D is the only option which makes each row, each column and both diagonals sum to 18.

x	10	5
8	y	4
7	2	z

7. **A** The values of the options are: A $\frac{22}{15} = 1\frac{7}{15}$; B $\frac{8}{15}$; C $\frac{11}{4} = 2\frac{3}{4}$; D $\frac{5}{6}$; E $\frac{15}{8} = 1\frac{7}{8}$. In ascending order these are: $\frac{8}{15}$; $\frac{5}{6}$; $1\frac{7}{15}$; $1\frac{7}{8}$; $2\frac{3}{4}$.

8. **B** In the diagram, U is the foot of the perpendicular from T to QR . The area of rectangle $PQRS = QR \times TU$. The area of triangle QTR is $\frac{1}{2} \times QR \times TU$. So the area of rectangle $PQRS$ is equal to $2 \times$ area of triangle $QTR = 2 \times (\frac{1}{2} \times 2 \times 4) \text{ cm}^2 = 8 \text{ cm}^2$.



9. **D** There are 60 seconds in one minute. So the number of seconds in one thousandth of one minute is $60 \div 1000 = 0.06$.
10. **E** Note that $45 = 5 \times 9$. As 5 and 9 are coprime, a positive integer is a multiple of 45 if and only if it is a multiple of both 5 and 9. The units digit of all five options is 5, so they are all multiples of 5. An integer is a multiple of 9 if and only if the sum of its digits is also a multiple of 9. The sums of the digits of the five options is 18, 18, 18, 18 and 8. So 305 is the only one of the options which is not a multiple of 9 and hence is not a multiple of 45.
11. **B** In the diagram, each of the seven vertices of the heptagon has four angles meeting at it. This makes 28 angles in total. These comprise the seven marked angles, fourteen right angles and the seven interior angles of the heptagon. The sum of the angles meeting at a point is 360° and the sum of the interior angles of the heptagon is $(7 - 2) \times 180^\circ = 5 \times 180^\circ$. Therefore, (the sum of the seven marked angles) $+ 14 \times 90^\circ + 5 \times 180^\circ = 7 \times 360^\circ$. So the sum of the seven marked angles is $(28 - 14 - 10) \times 90^\circ = 4 \times 90^\circ = 360^\circ$.
12. **D** Last year, the fraction of girls at the school was $\frac{315}{600} = \frac{63}{120} = \frac{21}{40}$. This year, there are 40 more pupils at the school, but the proportion of girls has remained the same. So there are 21 more girls at the school this year, making a total of $315 + 21 = 336$.

13. **C** Statement (i) is true since $2x > x$ for all $x > 0$.
Statement (ii) is not true. For example, $(\frac{1}{2})^2 = \frac{1}{4}$, which is not larger than $\frac{1}{2}$.
Statement (iii) is also not true. For example, $\sqrt{\frac{1}{9}} = \frac{1}{3}$, which is not smaller than $\frac{1}{9}$.

14. **B** If any corner square is shaded, then they all must be, and this gives one possible grid. Similarly if any one of b, c, j, k is shaded then so too are the others. That leaves only all four squares in the middle row, which provides the third and final possible grid.

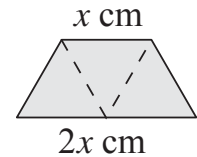
a	b	c	d
e	f	g	h
i	j	k	l

15. **A** The square root of 49 is 7. As 7 is factor of 49, it will also be a factor of the square of 49. So the required remainder is 0.
16. **D** Since neither 13 nor 19 is a multiple of 3, one couldn't possibly use three copies of a single coin in either case. If two of the extra coins are used, that would be even, so the third coin would need to be the 5p. That would imply the extra coin would have to be a 4p or a 7p to get 13p or 19p respectively. So two of the extra coin are not used. If only one of the extra coin is used, then it would come in addition to $2p + 2p$ or $2p + 5p$ or $5p + 5p$. To get 13p, you would need 9p or 6p or 3p respectively; and to get 19p you would need 15p or 12p or 9p respectively. Hence 9p is the only possible extra coin which makes both 13p and 19p possible.
17. **B** Let the required result be S . Then

$$\begin{aligned} S &= (2 + 4 + 6 + \dots + 100) - (1 + 3 + 5 + \dots + 99) \\ &= (2 - 1) + (4 - 3) + (6 - 5) + \dots + (100 - 99) \\ &= 50 \times 1 = 50. \end{aligned}$$

18. **A** The first five positive powers of 11 are $11^1 = 11$; $11^2 = 121$; $11^3 = 1331$; $11^4 = 14641$; $11^5 = 161051$. So 3 across is 14641, since this is the only five-digit power of 11. Therefore the solution to 2 down is a two-digit square with units digit 4 and so is $8^2 = 64$, as the only other two-digit squares are 16, 25, 36, 49, 81. Hence 1 across is a three-digit cube with units digit 6 and so is $6^3 = 216$, as the only other three-digit cubes are $5^3 = 125$, $7^3 = 343$, $8^3 = 512$, $9^3 = 729$. So the sum of the digits in the completed crossnumber is $2 + 1 + 6 + 1 + 4 + 6 + 4 + 1 = 25$.
19. **A** Note that the interior angles of an equilateral triangle, a square and a regular hexagon are 60° , 90° and 120° respectively. The angles at a point sum to 360° , so $\angle TUV = 360^\circ - (60^\circ + 90^\circ + 120^\circ) = 90^\circ$.
As WU is common to both equilateral triangle UVW and square $PUWX$, the lengths of the sides of UVW and $PUWX$ are equal. Similarly, UP is common to both square $PUWX$ and regular hexagon $PQRSTU$, so the lengths of the sides of $PUWX$ and $PQRSTU$ are also equal. So $UV = UP = UT$ and hence triangle UTV is a right-angled isosceles triangle with $\angle TVU = \angle VTU$. Therefore $\angle TVU = (180^\circ - 90^\circ) \div 2 = 45^\circ$.
20. **B** Since the range is 20 there must be more than one integer in the list. Could we manage with just two integers? If so one would need to be 10 greater than the median of 17 and the other 10 less than 17. This is indeed possible with the list 7, 27. So two is the smallest possible number of integers.

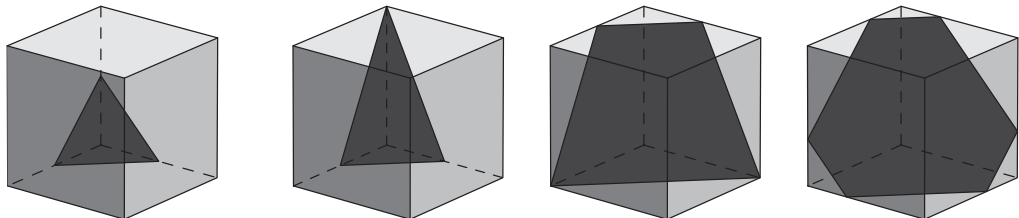
21. C The diagram shows that the small trapezium may be divided into three congruent equilateral triangles. Let the length of each side of the triangles be x cm. Then the base of the small trapezium is $2x$ cm.



The perimeter of the larger trapezium is made up of five equal line segments each of length $(2x + x)$ cm. So $15x = 18$. The perimeter of the smaller trapezium is $(x + x + x + 2x)$ cm $= 5x$ cm $= 5 \times \frac{18}{15}$ cm $= 6$ cm.

{It is left as an exercise for the reader to prove that the small trapezium may be divided into three congruent equilateral triangles.}

22. B Let the number of unicycles, bicycles and tricycles be u , b and t respectively. Then $u + b + t = 7 \dots (1)$; $u + 2b + 3t = 13 \dots (2)$; also $b > t$.
 $(2) - (1)$: $b + 2t = 6 \dots (3)$. As b and t are both positive integers, the only values of b and t which satisfy equation (3) are $b = 2, t = 2$ and $b = 4, t = 1$. However, $b > t$ so the only solution is $b = 4, t = 1$.
 Substituting in (1): $u + 4 + 1 = 7$. So $u = 2$.
23. E As 3 and 5 are coprime, the squares that have more than one mark are multiples of both 3 and 5, (multiples of 15); or multiples of both 3 and 7, (multiples of 21); or multiples of 5 and 7, (multiples of 35); or multiples of 3, 5 and 7, (multiples of 105). However, the latter will be included in all of the first three categories. Between 1 and 150 inclusive, there are ten multiples of 15, seven multiples of 21 and four multiples of 35, making a total of 21 multiples. However, there is one multiple of 3, 5 and 7 between 1 and 150, namely 105. So 105 has been counted three times in those 21 multiples, but corresponds to exactly one marked square. Therefore the total number of marked squares is $21 - 2 = 19$.
24. E The diagrams below show that all four cross-sections of cut are possible.



25. E Sam left Exeter three hours before Morgan left London, and travelled 3×25 miles $= 75$ miles in the three hours to 13:00. So at 13:00, the distance between Sam and Morgan was $(175 - 75)$ miles $= 100$ miles.
 Let the time in hours between 13:00 and the time at which Sam and Morgan met be t .
 Then $25t + 35t = 100$. So $t = \frac{100}{60}$ hours $= 100$ minutes $= 1$ hour 40 minutes.
 So Sam and Morgan met at 14:40.