

## UK JUNIOR MATHEMATICAL CHALLENGE

THURSDAY 30th APRIL 2015

Organised by the **United Kingdom Mathematics Trust**  
from the **School of Mathematics, University of Leeds**

<http://www.ukmt.org.uk>



Institute  
and Faculty  
of Actuaries

### SOLUTIONS LEAFLET

This solutions leaflet for the JMC is sent in the hope that it might provide all concerned with some alternative solutions to the ones they have obtained. It is not intended to be definitive. The organisers would be very pleased to receive alternatives created by candidates.

For reasons of space, these solutions are necessarily brief. There are more in-depth, extended solutions available on the UKMT website, which include some exercises for further investigation:

[http://www.ukmt.org.uk/](http://www.ukmt.org.uk)

#### The UKMT is a registered charity

---

- 1. A** The values of the expressions are: A 6, B 4, C 2, D  $-4$ , E 0.  
*(Alternative method: since every expression contains the integers 1, 2, 3 and 4, the expression which has the largest value is that in which the sum of the integers preceded by a minus sign is smallest. This is expression A.)*
- 2. E** At 22:22, there are  $60 - 22 = 38$  minutes to 23:00. There are then a further 60 minutes to midnight. So the number of minutes which remain until midnight is  $38 + 60 = 98$ .
- 3. D** The value of  $\frac{12\ 345}{1 + 2 + 3 + 4 + 5} = \frac{12\ 345}{15} = \frac{2469}{3} = 823$ .

4. A The calculations required to find the value of  $x$  are:

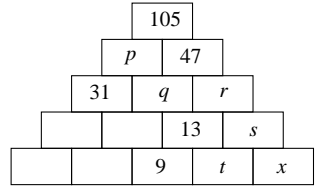
$$p = 105 - 47 = 58; q = p - 31 = 58 - 31 = 27;$$

$$r = 47 - q = 47 - 27 = 20;$$

$$s = r - 13 = 20 - 13 = 7; t = 13 - 9 = 4;$$

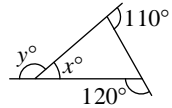
$$x = s - t = 7 - 4 = 3.$$

(Note that the problem may be solved without finding the values of four of the numbers in the pyramid. Finding these is left as an exercise for the reader.)



5. B Let the required number be  $x$ . Then  $\frac{x}{3} - \frac{x}{4} = 3$ . Multiplying both sides by 12 gives  $4x - 3x = 36$ . So  $x = 36$ .

6. B The sum of the exterior angles of any polygon is  $360^\circ$ . So  $y = 360 - (110 + 120) = 360 - 230 = 130$ .  
The sum of the angles on a straight line is  $180^\circ$ , so  
 $x = 180 - y = 180 - 130 = 50$ .



7. A The units digit of  $123\,456\,789 \times 8$  is 2, since  $9 \times 8 = 72$ . So, if the statement in the question is correct then the two digits which are in a different order are 1 and 2, whose sum is 3. As a check,  $123\,456\,789 \times 8$  is indeed  $987\,654\,312$ .

8. C All of the options are odd and therefore give a remainder of 1 when divided by 2. Two of the options, 3 and 9, give remainder 0 when divided by 3. Two other options, 5 and 11, give remainder 2 when divided by 3, and 7 is the only option which gives remainder 1 when divided by 3.

9. D The man has rowed the equivalent of just over 25 000 miles in approximately 13 years. So the mean number of 'miles' rowed per year is approximately  $\frac{25\,000}{13} \approx \frac{26\,000}{13} = 2000$ .

10. E If  $m$  and  $n$  are positive integers, then  $mn > m + n$  unless at least one of  $m$  or  $n$  is equal to 1, or  $m = n = 2$ . So, to maximise the expression, we need to place multiplication signs between 2 and 3 and between 3 and 4. However, we need to place an addition sign between 1 and 2 because  $1 + 2 \times 3 \times 4 = 25$ , whereas  $1 \times 2 \times 3 \times 4 = 24$ .

11. D It can be established that 2 is not one of the three primes to be summed since the sum of 2 and two other primes is an even number greater than 2 and therefore not prime. The smallest three odd primes are 3, 5, 7 but these sum to 15 which is not prime. The next smallest sum of three odd primes is  $3 + 5 + 11 = 19$ , which is prime. So 19 is the smallest prime which is the sum of three different primes.

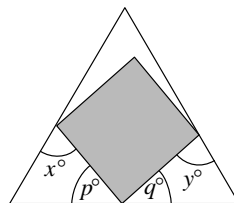
12. B The question tells us that 2 kg is two-thirds of the weight of the fish. So one-third of its weight is 1 kg and therefore its weight is 3 kg.

13. A We denote the label joining  $m$  and  $n$  as  $(m + n)$ . The labels which are multiples of 3 are  $(1 + 2)$ ,  $(1 + 5)$ ,  $(1 + 8)$ ,  $(2 + 4)$ ,  $(2 + 7)$ ,  $(3 + 6)$ ,  $(4 + 5)$ ,  $(4 + 8)$ ,  $(5 + 7)$ ,  $(7 + 8)$ . So 10 of the labels are multiples of 3.

14. E The primes and the number of illuminated bars which represent them are:  
 $2 \rightarrow 5$ ,  $3 \rightarrow 5$ ,  $5 \rightarrow 5$ ,  $7 \rightarrow 3$ . So all four prime digits are represented by a prime number of illuminated bars.

15. **C** Of the options given,  $23 \times 34$ ,  $56 \times 67$  and  $67 \times 78$  are all not divisible by 5, so may be discounted. Also 34 is not divisible by 4 and 45 is odd, so  $34 \times 45$  may also be discounted as it is not divisible by 4. The only other option is  $45 \times 56$ . As a product of prime factors,  $45 \times 56 = 2^3 \times 3^2 \times 5 \times 7$ , so it is clear that it is divisible by all of the integers from 1 to 10 inclusive.

16. **D** The size of each interior angle of an equilateral triangle is  $60^\circ$ . As the sum of the interior angles of a triangle is  $180^\circ$ ,  $x + p + 60 = 180$ , so  $p = 120 - x$ . Similarly,  $q = 120 - y$ . Each interior angle of a square is a right angle and the sum of the angles on a straight line is  $180^\circ$ , so  $p + q + 90 = 180$ .



Therefore  $120 - x + 120 - y + 90 = 180$ , that is  $330 - (x + y) = 180$ . So  $x + y = 330 - 180 = 150$ .

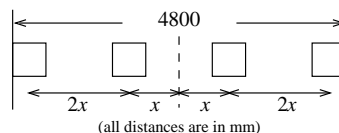
17. **B** If the Knave of Hearts is telling the truth then the Knave of Clubs is lying, which means that the Knave of Diamonds is telling the truth, but the Knave of Spades is lying. Alternatively, if the Knave of Hearts is lying then the Knave of Clubs is telling the truth, which means that the Knave of Diamonds is lying, but the Knave of Spades is telling the truth. In both cases, we can determine that two of the Knaves are lying, although it is not possible to determine which two they are.

18. **B** The fraction  $\frac{5274}{36\,918} = \frac{2637}{18\,459} = \frac{1}{7}$ , as given in the question.

19. **D** The first six positive cubes are 1, 8, 27, 64, 125, 216. Clearly, 64 cannot be the sum of three positive cubes as the sum of all the positive cubes smaller than 64 is  $1 + 8 + 27 = 36$ . Similarly, 125 cannot be the sum of three positive cubes as the largest sum of any three positive cubes smaller than 125 is  $8 + 27 + 64 = 99$ . However, we note that  $27 + 64 + 125 = 216$ , so 216 is the smallest cube which is the sum of three positive cubes.

20. **C** When the pyramid is viewed from above, it can be seen that the total area of the horizontal part of the surface of the pyramid (excluding its base) is the same as that of a square of side 4 metres, that is  $16 \text{ m}^2$ . The area of the base of the pyramid is also  $16 \text{ m}^2$ . Finally the total area of the vertical part of the pyramid is equal to  $(4 \times 1 + 4 \times 2 + 4 \times 3 + 4 \times 4) \text{ m}^2 = 40 \text{ m}^2$ . So the total surface area of the pyramid is  $(16 + 16 + 40) \text{ m}^2 = 72 \text{ m}^2$ .

21. **C** The diagram shows part of the wall of width 4800 mm and the four equally spaced pictures, each of width 420 mm. Let  $x$  be the required distance, that is the distance from the centre of each of the two pictures in the middle of the wall to a vertical line down the centre of the wall (marked by a broken line).

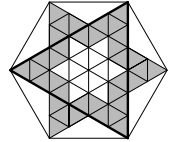


Then the distance between the centres of any two adjacent pictures is  $2x$ .

Note that the distance between the centres of the two pictures on the extremes of the wall is  $(4800 - 2 \times 210) \text{ mm} = 4380 \text{ mm}$ . Therefore  $2x + x + x + 2x = 4380$ .

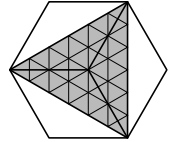
So  $x = 4380 \div 6 = 730$ . Hence the required distance is 730 mm.

22. E In the diagram, the shaded small equilateral triangles have been divided into those which lie within the highlighted large equilateral triangle and the twelve small equilateral triangles which lie outside the large triangle.

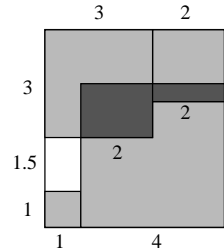


Note that the unshaded star shape in the centre of the large triangle is made up of twelve small equilateral triangles, so the small triangles outside the large triangle could be moved into the large triangle so that the large triangle is shaded completely and the rest of the hexagon is unshaded as in the lower diagram.

The lower diagram shows that the hexagon may be divided into six congruent triangles, three of which are shaded and three of which are unshaded. So the required fraction is  $\frac{1}{2}$ .



23. D The diagram shows some of the lengths of sides which may be deduced from the information given in the question. Note that the rectangle measures 5 cm by 5.5 cm. The sum of the areas of the four glass squares is  $(1 + 4 + 9 + 16) \text{ cm}^2 = 30 \text{ cm}^2$ . However, the total region of the rectangle occupied by the four squares is equal to  $(5 \times 5.5 - 1.5) \text{ cm}^2 = 26 \text{ cm}^2$ . So the area of the overlap is  $(30 - 26) \text{ cm}^2 = 4 \text{ cm}^2$ .



24. B For a number to be a multiple of 45 it must be a multiple of 5 and also of 9. In order to be a multiple of 5, a number's units digit must be 0 or 5. However, the units digit of a palindromic number cannot be 0, so it may be deduced that any palindromic number which is a multiple of 45 both starts and ends in the digit 5. In order to make the desired number as large as possible, its second digit should be 9 and for it to be as small as possible its second digit should be 0. So, if possible, the numbers required are of the form '59x95' and '50y05'. In addition, both numbers are to be multiples of 9 which means the sum of the digits of both must be a multiple of 9. For this to be the case,  $x = 8$  and  $y = 8$ , giving digit sums of 36 and 18 respectively. So the two required palindromic numbers are 59895 and 50805. Their difference is 9090.

25. E The exterior angle of a triangle is equal to the sum of its two interior and opposite angles.

Applying this theorem to triangle  $UZX$ :

$$\angle VUW = z^\circ + x^\circ.$$

Similarly, in triangle  $WYX$ :  $y^\circ = \angle XWY + x^\circ$ ,  
so  $\angle XWY = y^\circ - x^\circ$ .

As  $VU = VW$ ,  $\angle VUW = \angle VWU$  and also  $\angle VWU = \angle XWY$  because they are vertically opposite angles. Therefore  $\angle VUW = \angle XWY$ . So  $z^\circ + x^\circ = y^\circ - x^\circ$  and hence  $x = \frac{1}{2}(y - z)$ .

